



031 764 1972 (South Africa)
www.conquestaolympiads.com
conquest@iafrica.com


Papers are to be returned in STRICT NUMERICAL ORDER by student number. If a student writes more than one subject, please keep his/her papers together, in subject order. Thank you.

Mathematics – Grade 2


Welcome to your Conquesta Olympiad.
Read all the questions carefully.

(Teachers may read all text out aloud.)
You must decide which is the correct answer for each question – and draw a circle around (a), (b), (c) or (d) on the right hand side of each question.
You may only choose one answer for each question.





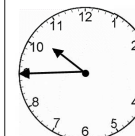



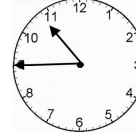
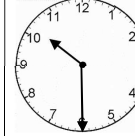
Example: What comes next? 125, 130, 135, 140,	(a) 130	(b) 150	(c) 145	(d) 135
--	------------	------------	------------	------------



Look at the picture below and circle the correct answers for questions 1 – 9.



1. There are 4 ladybugs on a bush. Each one has 6 spots. How many spots can Hayden count?	(a) 2	(b) 23	(c) 24	(d) 20
2. How many lines of symmetry are on one ladybug?	(a) 1	(b) 2	(c) 0	(d) 3

3. 47 learners go walking in the park. 19 see a ladybug.  How many pupils did <u>not</u> see the ladybug?	(a) 26	(b) 29	(c) 28	(d) 27
4. The value of the 4 in 47 is 47	(a) 40 tens	(b) 4 units or 4	(c) 4 tens or 40 units	(d) 400 units
5. The correct spelling of 47 is	(a) forty seven	(b) forty-seven	(c) fourty seven	(d) forty-seven
6. We left the park at half past ten. Which clock shows that time:	(a) 	(b) 	(c) 	(d) 
7. What will the time be half an hour later? 	(a) 	(b) 	(c) 	(d) 
8. How many minutes in half an hour?	(a) 5	(b) 60	(c) 15	(d) 30
9. What month comes just before July?	(a) June	(b) August	(c) September	(d) May