



031 764 1972 (South Africa)
www.conquestaolympiads.com
conquest@iafrica.com

Papers are to be returned in STRICT NUMERICAL ORDER by student number. If a student writes more than one subject, please keep his/her papers together, in subject order. Thank you.

Mathematics – Grade 1

Welcome to your Conquesta Olympiad.
Read all the questions carefully.
(Teachers may read all text out aloud.)
You must decide which is the correct answer for each question – and draw a circle around (a), (b), (c) or (d) on the right hand side of each question.
You may only choose one answer for each question.

--	--	--	--

Example:

Circle the correct answer: $6 - 2 =$



(a)
7

(b)
4








(c)
8

(d)
9

Look at the pictures below and circle the correct answers for questions 1 – 9.



1.	Luke buys a sweet for 8c from the tuckshop. He paid with a 10c coin. How much change does he get?	(a) 1c	(b) 18c	(c) 2c	(d) 5c
2.	How many 2c coins would I need to make 8c?	(a) 10	(b) 2	(c) 4	(d) 5
3.	Which sum is <u>not</u> correct?	(a) $8 = 6 + 3 - 2$	(b) $5 + 4 - 1 = 8$	(c) $8 = 10 - 2$	(d) $5 + 2 + 2 - 1 = 8$

4.	Which coin is missing? 5c, 10c, 20c, 50c, R2, R5,	(a) R2	(b) 50c	(c) R1	(d) R5
5.	What shape is this? 	(a) circle	(b) triangle	(c) sphere	(d) cone
6.	What type of shape is in question 5?	(a) 4D	(b) 3D	(c) 2D	(d) 1D
7.	The spoon is the bowl. 	(a) on the right side of	(b) below	(c) behind	(d) on the left side of
8.	There are 3 friends. Each friend gets 2 scoops of ice cream in their bowl.  How many scoops will I need?	(a) 9	(b) 5	(c) 4	(d) 7
9.	Which ice cream follows next in the pattern? 	(a) 	(b) 	(c) 	(d) 